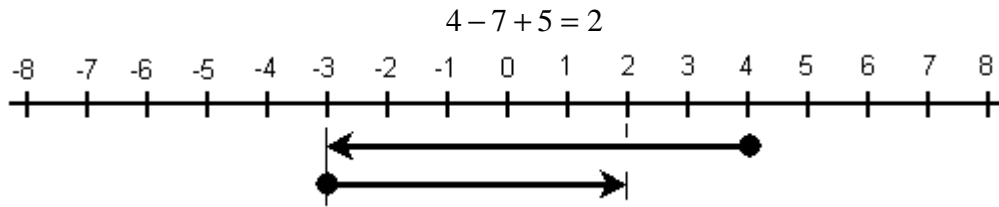


Fitxa C Suma i resta d'enters

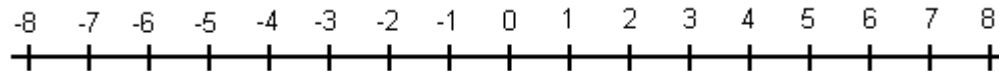
Nom alumne/a:

Grup:

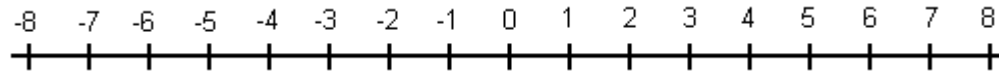
Realitza les següents operacions com a l'exemple:



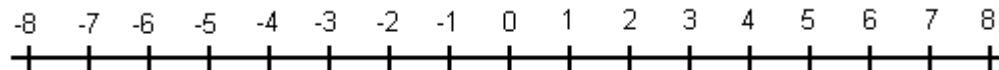
a)  $3 - 4 + 9 =$



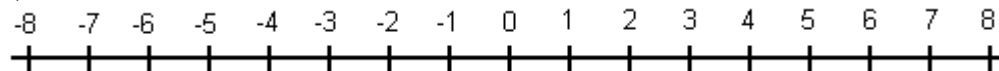
b)  $6 - 8 + 5 =$



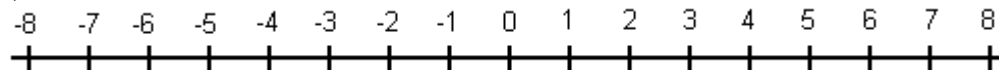
c)  $3 - 5 + 7 =$



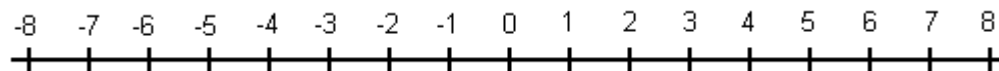
d)  $(-7) + 9 - 2 =$



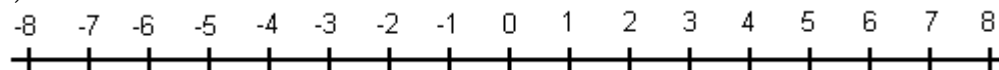
e)  $(-4) - 3 + 5 =$



f)  $5 - 8 - 4 =$



g)  $(-6) + 9 + 2 =$



h)  $1 - 2 + 4 =$

